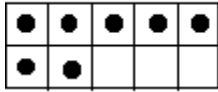
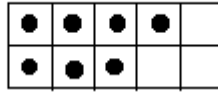
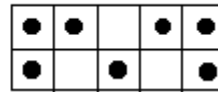


Name: _____ Date: _____

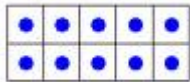
How many dots are on the 10 frames?

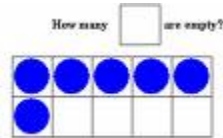




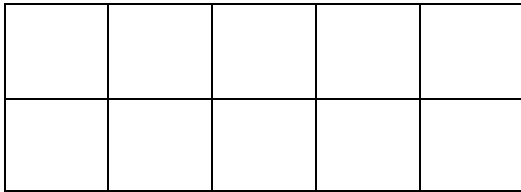


How many dots are **empty** on the 10 frames?

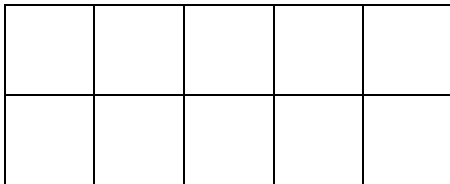





Show me 9 on the 10 frame.



Show me 2 ways to make 4 on the 10 frames.



Explain your thinking!! 😊

Fix the sentences! Hint: You need capital letters! 😊

i like cheese pizza. _____


is it monday? _____

what time is lunch? _____

Name: _____ Date: _____

1. Is 18 even or odd? Draw a picture to explain your thinking.

2. Is 36 even or odd? Draw a picture to explain your thinking.

Is it $>$, $<$, or $=$? Hint: Remember Allie the alligator  eats the biggest number!! 😊

12 _____ 27 9 _____ 9 45 _____ 30 3 _____ 10

80 _____ 80 44 _____ 98 66 _____ 75 7 _____ 0

Fill in the correct punctuation mark: ., ?, !

I like markers _____

What time is art _____

A bug _____

Andres likes pizza _____

Lauryn loves stickers _____

Can you pass me the pencil _____

Fix the following words with capital letters.

friday _____ i _____ nola _____

october _____ john _____


Name: _____ Date: _____

1. How many cars do you see?



_____ Is this number odd or even? _____

2. How many ladybugs do you see?



_____ Is this number odd or even? _____

3. Fill in the missing numbers.

_____, 10, _____, _____, 25, _____, _____, 40, _____, 50, _____, 55

4. Fill in the missing numbers.

6, _____, 10, _____, _____, 16, _____, 20, _____, _____, 26, _____

5. Fix the following with capital letters.

target _____ sunday _____

i _____ today is friday. _____

october _____ yanyra _____

do you like to read? _____

math is fun! _____ trevion _____

Name: _____ Date: _____

1. Isreal scored 7 points. Matthew scored 3 less than Isreal. How many points did Matthew score?

2. I saw 3 birds, 4 ducks, and 5 dogs at the park. How many animals did I see all together?

3. Adolfo is 7 years old. In how many years will Adolfo be 12 years old?

4. $36 + 23 =$ 5. $56 - 45 =$ 6. $74 - 2 =$

7. _____ + 9 = 12 8. _____ - 7 = 13

Fix the sentences.

9. edwin was reading his book quietly.

10. will you go to the park with me on Saturday?

11. do you like pizza?

12. when do we have lunch?

13. i see a spider on your back!