

Name: _____ Date: _____

1. Make the fact family:

4, 3, 7

$$\begin{array}{r} \underline{\quad} + \underline{\quad} = \underline{\quad} \\ \underline{\quad} + \underline{\quad} = \underline{\quad} \\ \underline{\quad} - \underline{\quad} = \underline{\quad} \end{array}$$

2. Find the missing family member: , 2, 5
How do you know?

3. Make the fact family:

5, 4, 9

$$\begin{array}{r} \underline{\quad} + \underline{\quad} = \underline{\quad} \\ \underline{\quad} + \underline{\quad} = \underline{\quad} \\ \underline{\quad} - \underline{\quad} = \underline{\quad} \end{array}$$

4. Find the missing family member: 3, , 9
How do you know?

5. Make the fact family:

6, 5, 11

$$\begin{array}{r} \underline{\quad} + \underline{\quad} = \underline{\quad} \\ \underline{\quad} + \underline{\quad} = \underline{\quad} \\ \underline{\quad} - \underline{\quad} = \underline{\quad} \end{array}$$

6. Find the missing family member: 2, 4,

Fill in the r-controlled vowels:



c_____



flow_____



w_____m



question m_____k



p_____se

Draw a picture with "ar."

Draw a picture with "er."

Name: _____ Date: _____

Make the fact family:

6, 3, 9

$$\begin{array}{r} \underline{\quad} + \underline{\quad} = \underline{\quad} \\ \underline{\quad} + \underline{\quad} = \underline{\quad} \\ \underline{\quad} - \underline{\quad} = \underline{\quad} \end{array}$$

2. Find the missing family member: $\underline{\quad}, 4, 5$
How do you know?

3. Make the fact family:

2, 7, 9

$$\begin{array}{r} \underline{\quad} + \underline{\quad} = \underline{\quad} \\ \underline{\quad} + \underline{\quad} = \underline{\quad} \\ \underline{\quad} - \underline{\quad} = \underline{\quad} \end{array}$$

4. Find the missing family member: $2, \underline{\quad}, 10$
How do you know?

5. Make the fact family:

8, 3, 11

$$\begin{array}{r} \underline{\quad} + \underline{\quad} = \underline{\quad} \\ \underline{\quad} + \underline{\quad} = \underline{\quad} \\ \underline{\quad} - \underline{\quad} = \underline{\quad} \end{array}$$

6. Find the missing family member: $3, 7, \underline{\quad}$

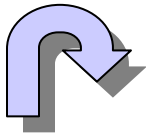
Match the picture with its r-controlled vowel.



ir



ur



er



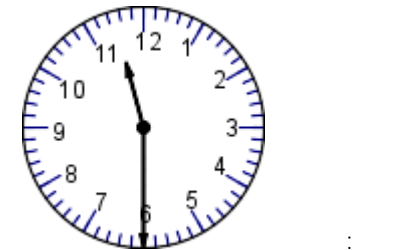
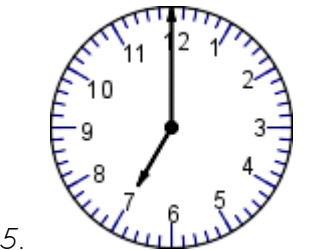
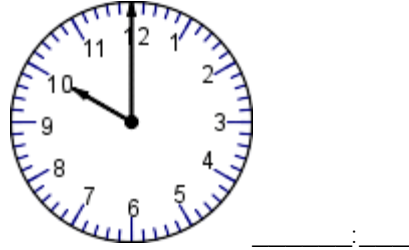
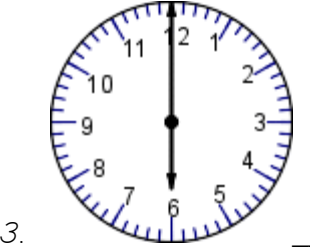
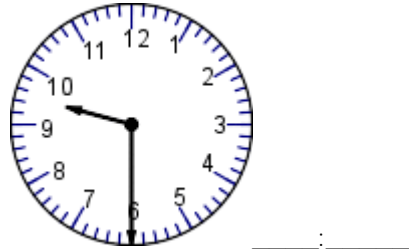
or



ar

Name: _____ Date: _____

What time do the clocks say?



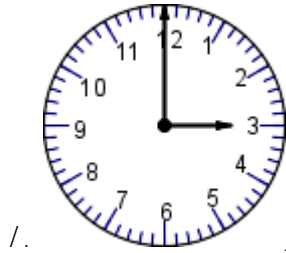
Read the story and answer the questions.

Alejandro went to school. He rode the bus. When he got off the bus, he walked to class. He practiced his reading. He also loved working in math tubs! Then the school day was over, and it was time to go home.

7. Where did Alejandro go?
 - a. the toy store
 - b. school
 - c. cafeteria
8. How did Alejandro get to class?
 - a. He ran.
 - b. He skipped.
 - c. He walked.
9. What do you think Alejandro's favorite subject is?
 - a. Math
 - b. Reading
 - c. Art
10. What do you think Alejandro will do next?
 - a. He will eat lunch.
 - b. He will ride the bus home.
 - c. He will play on the playground.

Name: _____ Date: _____

Look at the clocks and write the time.



1. _____:_____



2. _____:_____

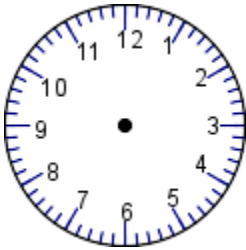


3. _____:_____

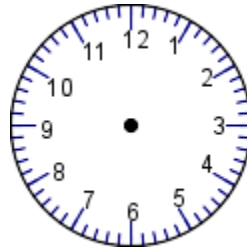


4. _____:_____

Show me the times on the clocks. Hint: Draw the hour and minute hands! 😊



9:00



11:30

Read the story and answer the questions.

Raniya played tag with her friends. The sun was shining. The trees leaves were falling down. The girls all had their jackets on to keep warm. They had fun playing tag!

5. What was Raniya doing?
 - a. playing tag
 - b. going down the slide
 - c. running
6. What time of day do you think it was?
 - a. night time
 - b. day time
7. What season do you think this is?
 - a. summer
 - b. winter
 - c. fall
8. What is something you could do in the fall?
 - a. make a snowman
 - b. jump in leaves
 - c. wear gloves, boots, and a scarf

